

Foundations of the UML

Winter Term 07/08

– Assignment 6 –

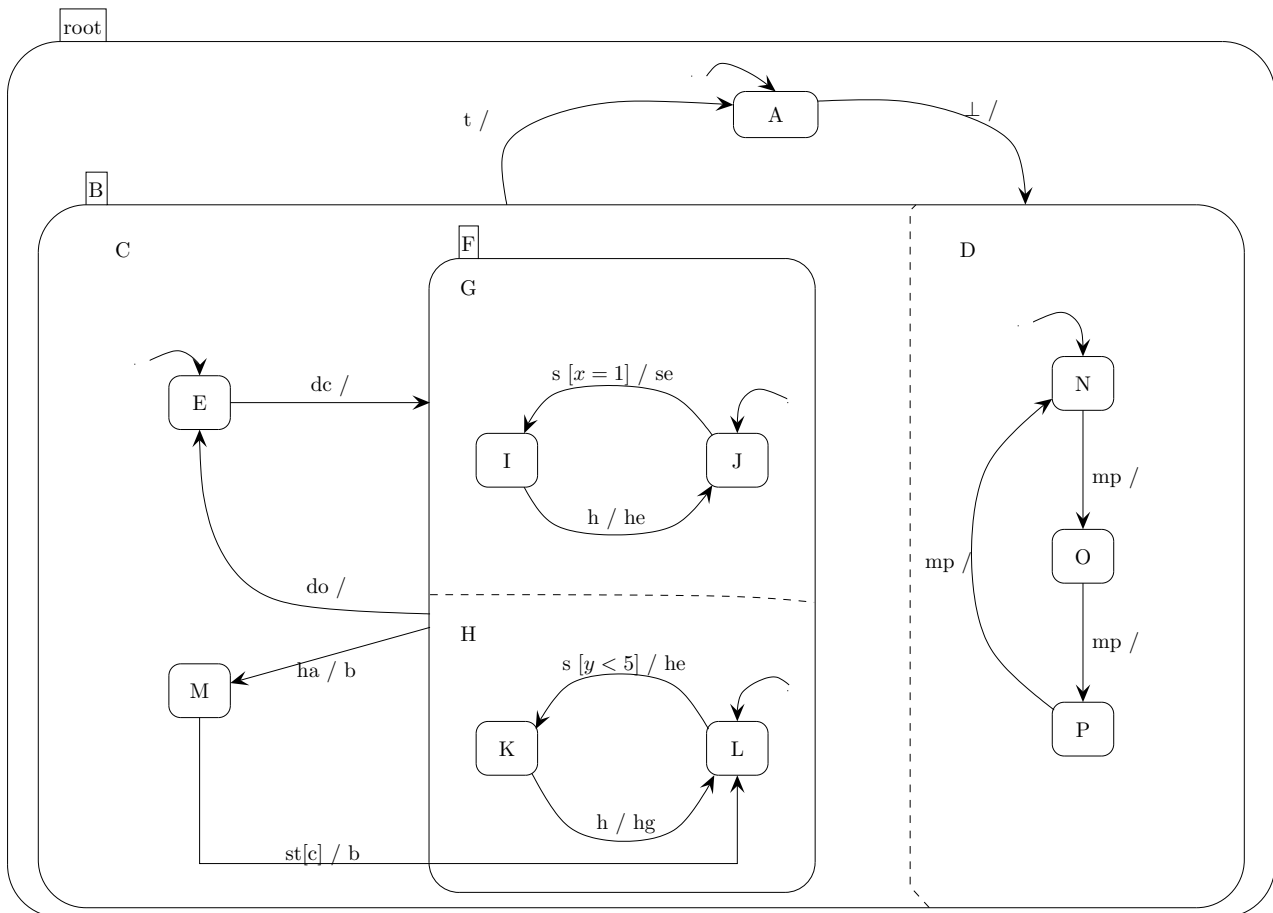
Hand in until January 23th before the exercise class.

Note: In this assignment an edge label of the form e/e' of Statechart Sc means that Sc is consuming event e and executing an action that is sending the event e' to Sc (i.e., to itself).

Exercise 1

(10 points)

Let the following Statechart $Sc = (N, E, Edges)$ be given:

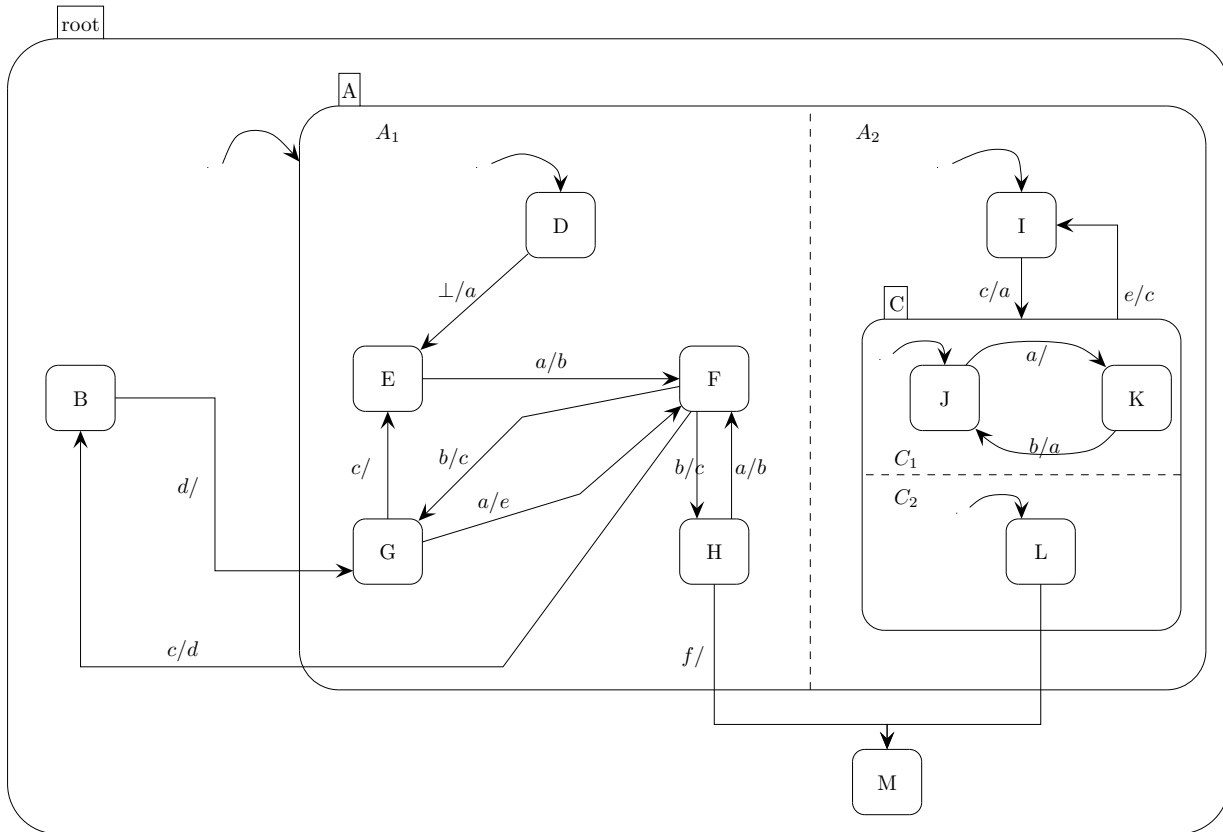


- Describe Statechart Sc formally, i.e., give the components $(N, E, Edges)$.
- Construct the tree that represents the node hierarchy of Statechart Sc .
- Determine the types of the nodes of Statechart Sc .

Exercise 2

(15 points)

Let the following stand-alone Statechart (i.e., there are no Statecharts running in parallel to Sc) $Sc = (N, E, Edges)$ be given:



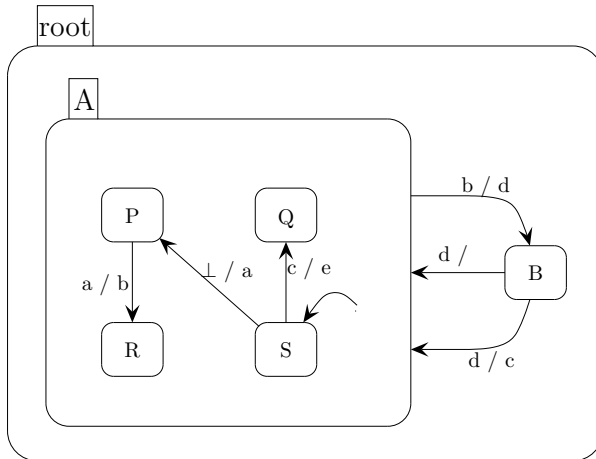
- Determine 5 configurations $(c_i, i \in \{1, \dots, 5\})$ of Sc .
- For each configuration from a) give two distinct example states $(s_i, s'_i, i \in \{1, \dots, 5\})$.
- Calculate the sets of enabled edges $En(s)$ of all states s determined in b).
- Determine the scopes of the edges:
 - $\{H, L\} \longrightarrow \{M\}$
 - $\{B\} \longrightarrow \{G\}$
 - $\{C\} \longrightarrow \{I\}$
- List at least 2 examples of pairs of inconsistent edges and 2 examples of pairs of consistent (and distinct) edges.

Exercise 3

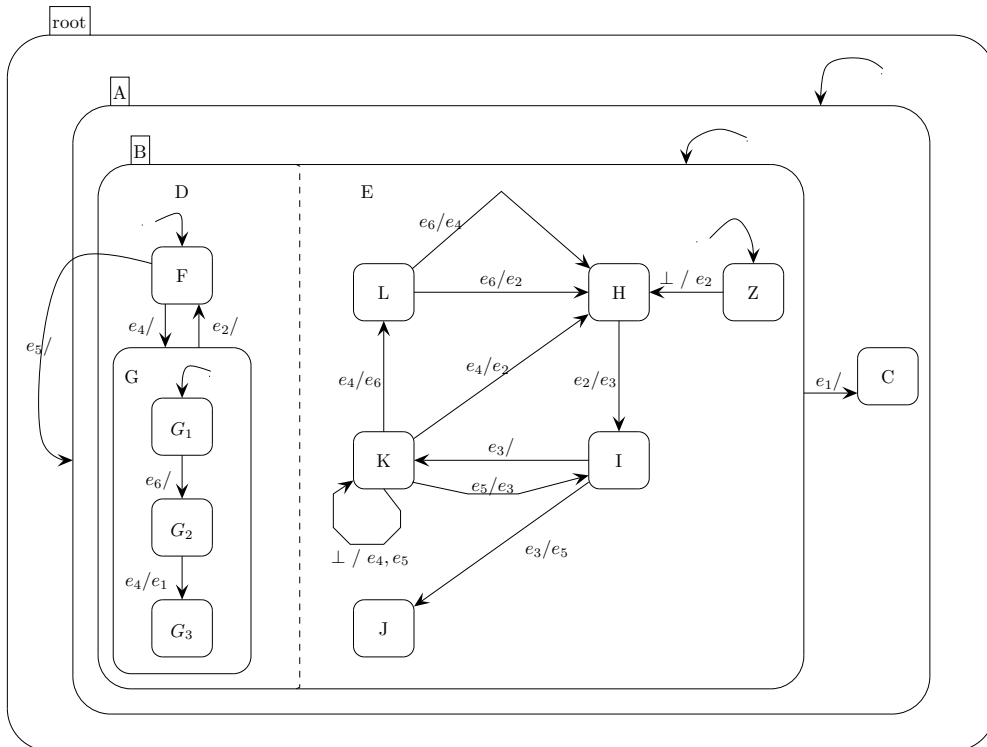
(15 points)

Let the following Statecharts Sc_1 and Sc_2 be given:

Sc_1 :



Sc_2 :



- Determine the formal semantics for each of the Statecharts Sc_1 and Sc_2 (i.e., construct the related Mealy machine for each Statechart) by successively calculating locations and steps (starting from the initial location l_0). In both cases write down all your calculations before constructing the corresponding automaton.
- Determine the priority between moving from F to G and moving from F to A if both edges are enabled.